


**INDIAN SCHOOL MUSCAT
PRIMARY SECTION**

Subject : Maths	Tasksheet – 2	Name :
Topic : Addition		Std : I Sec :
Resource Person : Ms.Emilda Dsouza		Date :
Teacher's Signature :		Parent's Signature :

1. Count and add



+

=

2. Add the following.


a. 3
 + 0

c. 8
 + 2

b. 6 + 4 =

d. 0 + 10 =

2. Count and add



+

=

2. Add the following.

a. 3
 + 0

c. 8
 + 2

b. 6 + 4 =

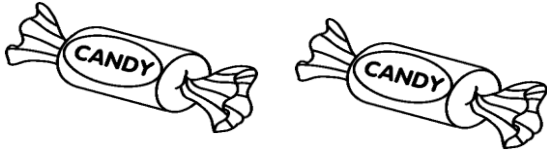
d. 0 + 10 =

3. Word problem.

Riya has 7 chocolates.

Arun gave her 3 more.

How many chocolates does Riya have?



4. Look at the number line and add.



a. $6+1 =$

b. $7+3 =$

c. $4+4 =$

d. $8+2 =$